

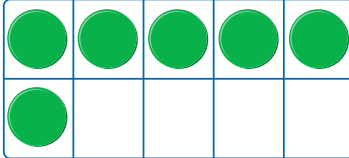


Number 6

A Write the numeral 6.

6	6	6	6	6	6	   six six six six
6	6	6	6	6	6	
6	6					

B Show the number 6 in different ways.

Colour 6 boxes on the ten frame.

Write the number word.

six

Draw 6 dots on the domino.

--	--


Draw 6 space objects.



Draw 6 dots on the dice.

--	--

Colour 6 moons.




Number 7

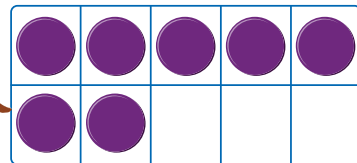
A Write the numeral 7.



7					



seven



seven seven
seven seven

--	--	--	--	--

B Show the number 7 in different ways.

Colour 7 boxes on the ten frame.

Write the number word.

seven


Draw 7 dots on the domino.

Draw 7 school objects.



Draw 7 dots on the dice.

Colour 7 pencils.



Numbers 6 and 7

A Trace the numeral and colour the correct amount in each row.

B Colour the correct amount in each box.

6

7

7

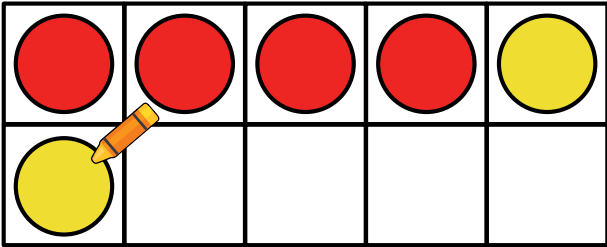
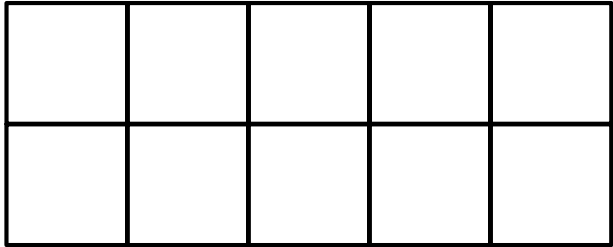
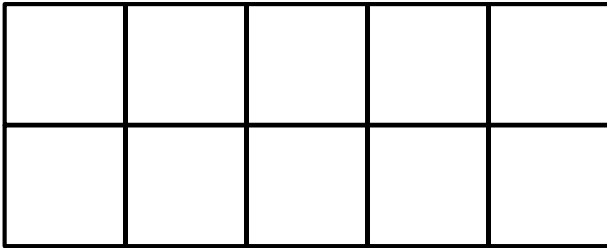

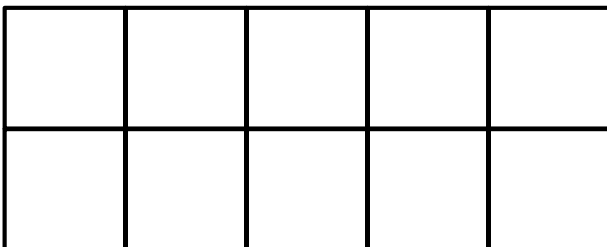
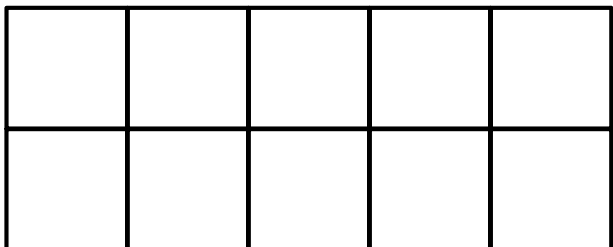
6

6


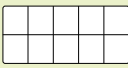
7

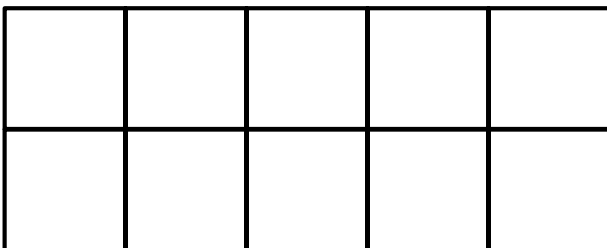
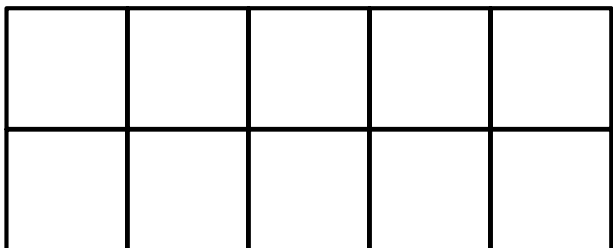
Composition of Number – 1 to 7

Draw the correct amount of counters on each .
Use **red** and **yellow** to colour the counters.

<p>6</p> 	<p>5</p> 
<p>7</p> 	<p>4</p> 
<p>3</p> 	<p>6</p> 


Try this!

Draw your own  and  in the .
Count the counters in each frame. Write each number.

<div style="border: 1px solid black; width: 40px; height: 40px; margin: 0 auto 20px auto;"></div> 	<div style="border: 1px solid black; width: 40px; height: 40px; margin: 0 auto 20px auto;"></div> 
---	--

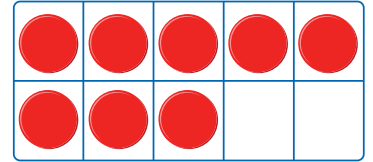
Number 8

A Write the numeral 8.



eight

8	8	8	8	8	8
8	8	8	8	8	8
8	8				



eight

eight

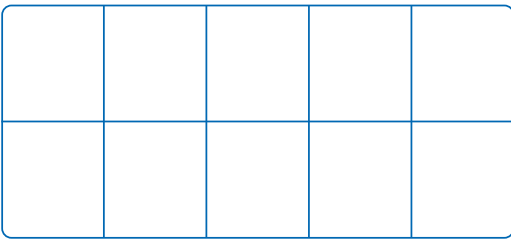
eight

eight

--	--	--	--	--	--	--	--	--	--

B Show the number 8 in different ways.

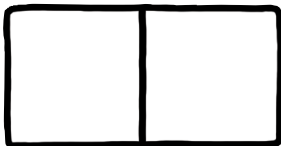
Colour 8 boxes on the ten frame.




Write the number word.

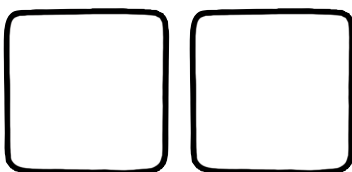
eight

Draw 8 dots on the domino.




Draw 8 minibeasts. 

Draw 8 dots on the dice.



Colour 8 birds.



Number 9


A Write the numeral 9.



9	9	9	9	9	9
9	9	9	9	9	9
9	9				

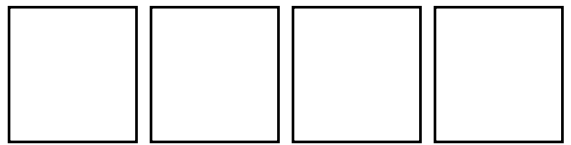


nine



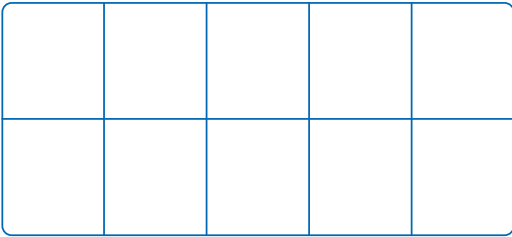
nine nine nine

nine nine nine



B Show the number 9 in different ways.

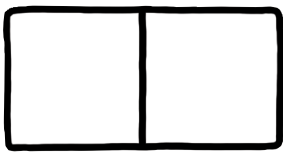
Colour 9 boxes on the ten frame.



Write the number word.

nine

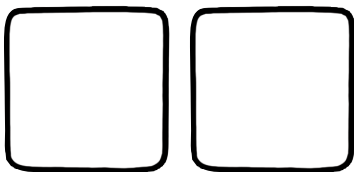
Draw 9 dots on the domino.




Draw 9 fruits.



Draw 9 dots on the dice.



Colour 9 lemons.



Numbers 8 and 9

A Trace the numeral and colour the correct amount in each row.

B Colour the correct amount in each box.

9

8

8

9

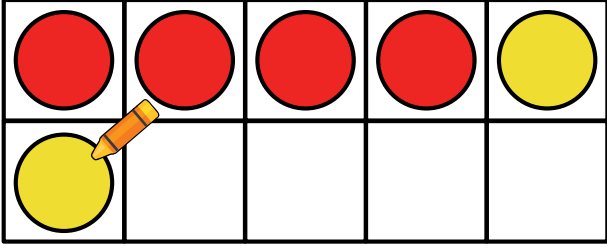

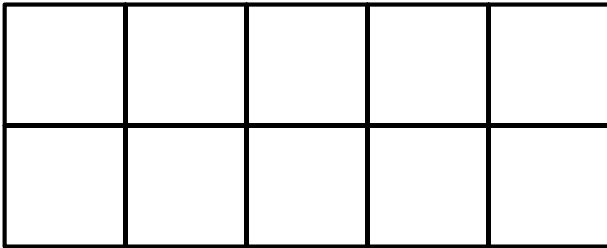

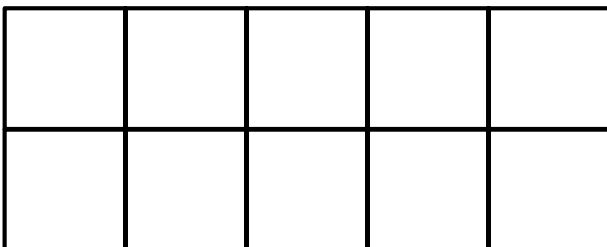
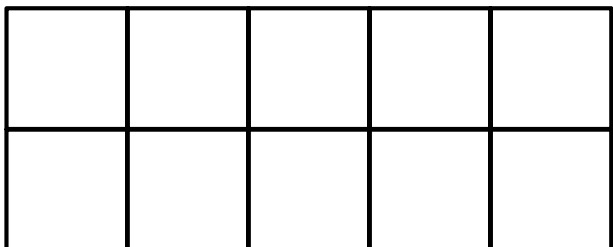
9

8



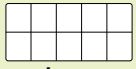




Composition of Number – 1 to 9

Draw the correct amount of counters on each .
Use **red** and **yellow** to colour the counters.

<p>6</p> 	<p>5</p> 
<p>7</p> 	<p>9</p> 
<p>8</p> 	<p>6</p> 

Try this!


Draw your own  and  in the .
Count the counters in each frame. Write each number.

<p><input type="text"/></p> 	<p><input type="text"/></p> 
---	--

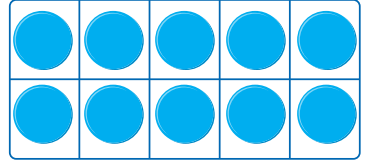


Number 10

A Write the numeral 10.



ten



ten ten ten
ten ten ten

--	--	--	--

B Show the number 10 in different ways.

Colour 10 boxes on the ten frame.

Write the number word.

ten

Draw 10 dots on the domino.

--

Draw 10 balls.

Draw 10 dots on the dice.

--	--

Colour 10 toy cars.



Number 10

A Write the numeral 10.

B Colour 10 toys in each row.



Numbers 1 to 10

Without counting all, can you tell how many in each frame? Can you tell how many spaces?



Match each number word and numeral to the correct ten frame.

three

five

seven

two

four

ten

eight

one

six

nine

1

2

3

4

5


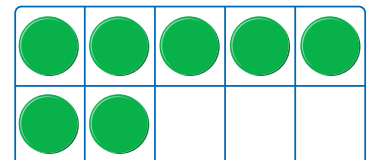
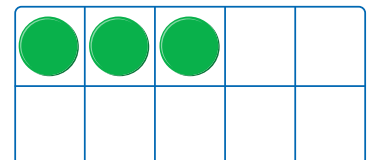

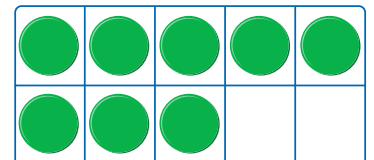
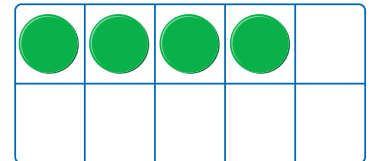
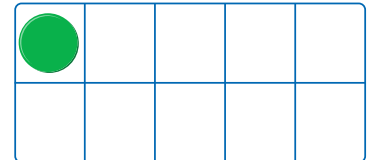
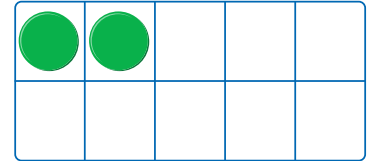
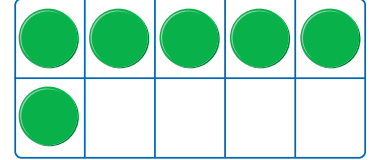
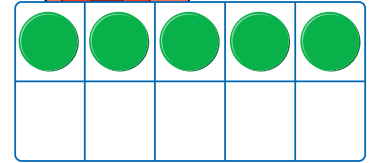
6

7

8

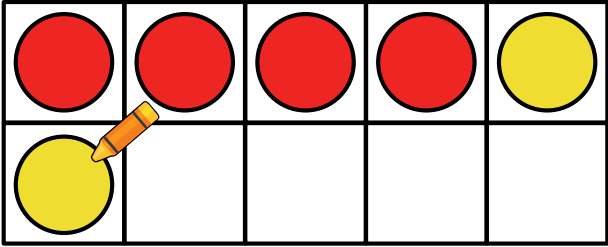

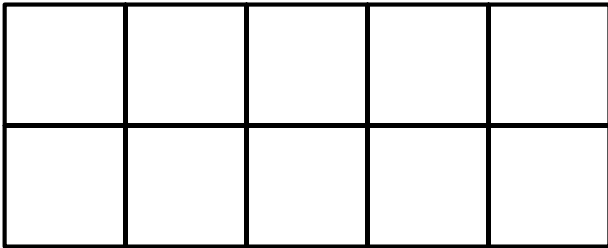

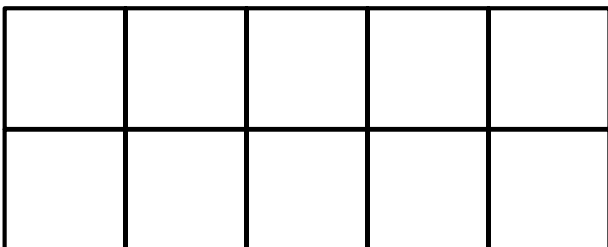
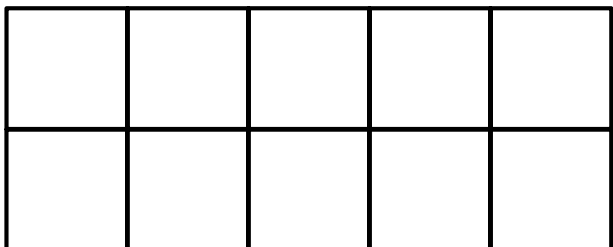
9



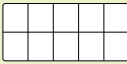
10





Composition of Number – 5 to 10

Draw the correct amount of counters on each . Use **red** and **yellow** to colour the counters.

<p>6</p> 	<p>5</p> 
<p>7</p> 	<p>9</p> 
<p>8</p> 	<p>10</p> 

Try this! Draw your own  and  in the . Count the counters in each frame. Write each number.

<div style="border: 1px solid black; width: 60px; height: 60px; margin: 0 auto;"></div> 	<div style="border: 1px solid black; width: 60px; height: 60px; margin: 0 auto;"></div> 
---	--

